

Şekil Sayı Eşleştirme

→
= 4

◇
= 1

△
= 7

□
= 5

+

○
= 9

×

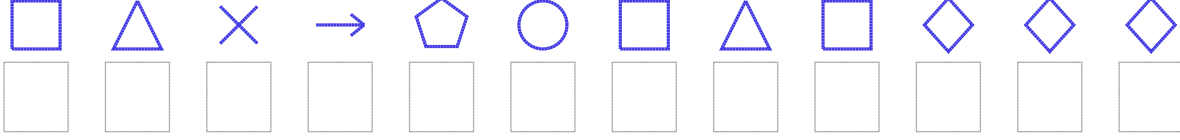
⬠
= 6

▽
= 3

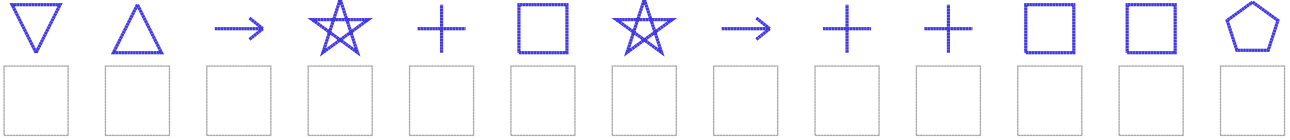
☆
= 2

Aşağıdaki uzun şifreleri hatasız çözerek altlarına yazın:

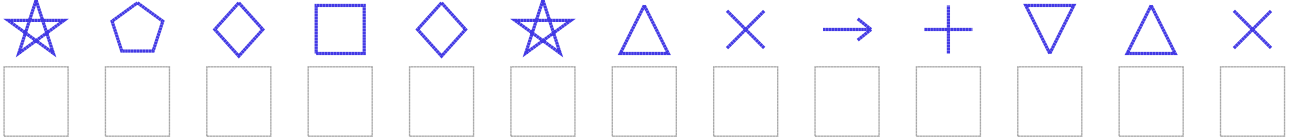
1. Şifre



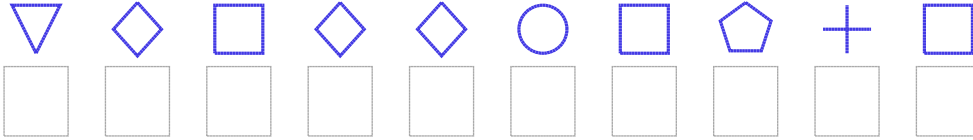
2. Şifre



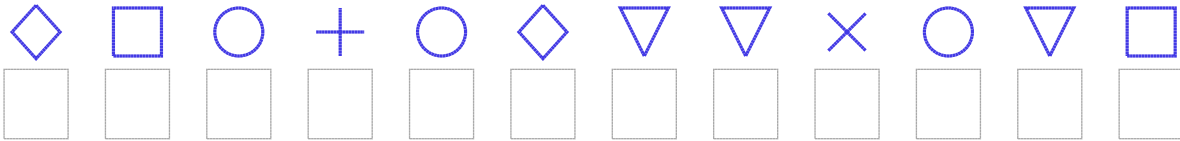
3. Şifre



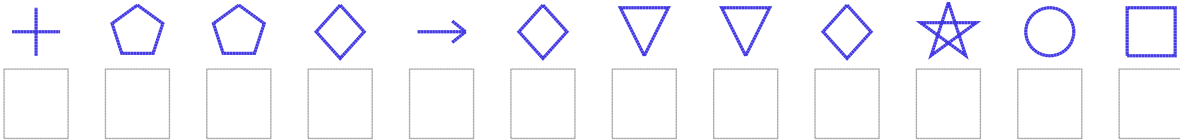
4. Şifre



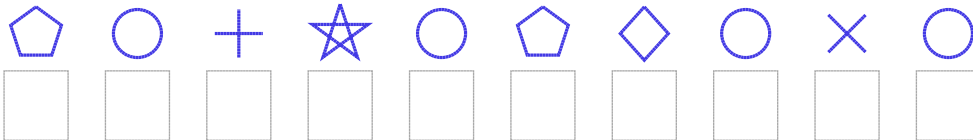
5. Şifre



6. Şifre



7. Şifre



□ BONUS: 1. ve 4. şifrenin üçüncü rakamının toplamı kaçtır?

Cevap Anahtarı

1. Şifre: 570469575111

2. Şifre: 3742852488556

3. Şifre: 2615127048370

4. Şifre: 3151195685

5. Şifre: 159891330935

6. Şifre: 866141331295

7. Şifre: 6982961909

□ Bonus Soru Cevabı: 5